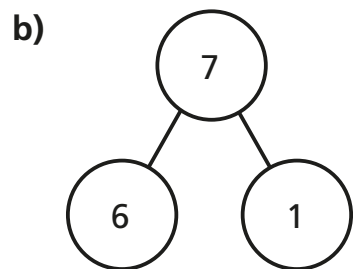
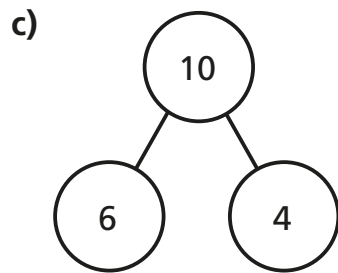
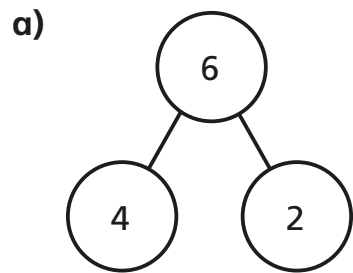


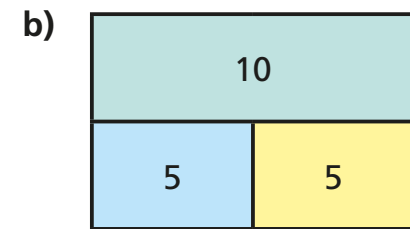
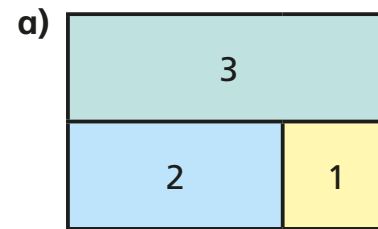
1 Complete a fact family for each part-whole model.

$$\begin{array}{ccc} \square & + & \square = \square \\ \square & + & \square = \square \\ \square & = & \square + \square \\ \square & = & \square + \square \end{array}$$



2 Complete a fact family for each bar model.

$$\begin{array}{ccc} \square & + & \square = \square \\ \square & + & \square = \square \\ \square & = & \square + \square \\ \square & = & \square + \square \end{array}$$



3 Use the digit cards to complete a fact family.



4 Work with a partner to write a different fact family.

